





Use the array provided to solve each problem.


1)  $37 \times 30 =$




2)  $20 \times 24 =$




3)  $27 \times 20 =$




4)  $20 \times 26 =$



5)  $22 \times 20 =$



6)  $20 \times 29 =$



Answers

1. \_\_\_\_\_

2. \_\_\_\_\_

3. \_\_\_\_\_

4. \_\_\_\_\_

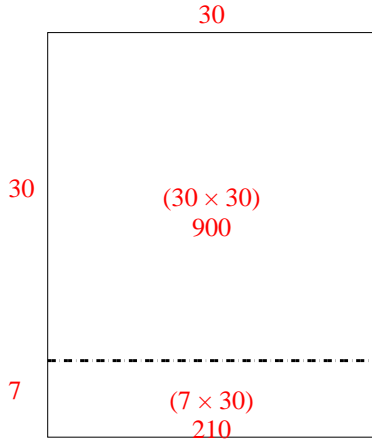
5. \_\_\_\_\_

6. \_\_\_\_\_

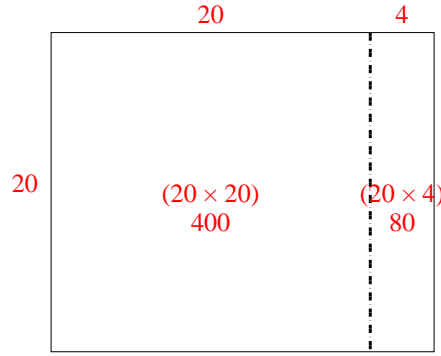


Use the array provided to solve each problem.

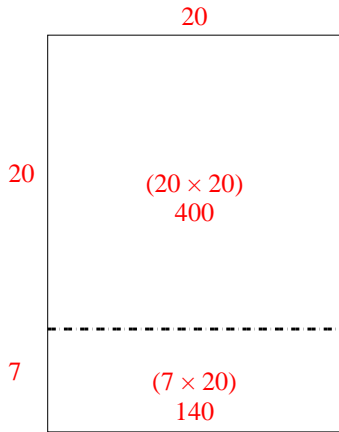
1)  $37 \times 30 =$



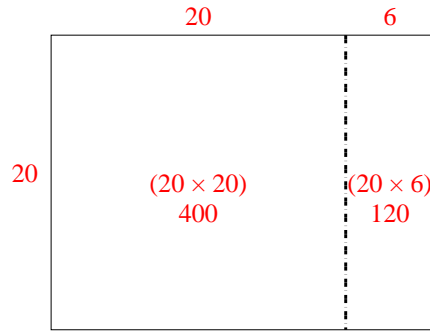
2)  $20 \times 24 =$



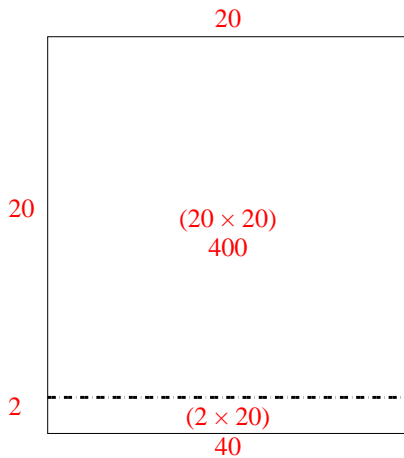
3)  $27 \times 20 =$



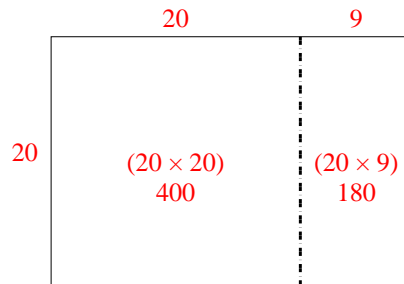
4)  $20 \times 26 =$



5)  $22 \times 20 =$



6)  $20 \times 29 =$



Answers

1. 1,110
2. 480
3. 540
4. 520
5. 440
6. 580




Use the array provided to solve each problem.


1)  $20 \times 34 =$




2)  $20 \times 24 =$




3)  $28 \times 20 =$




4)  $23 \times 20 =$



5)  $22 \times 20 =$



6)  $25 \times 20 =$



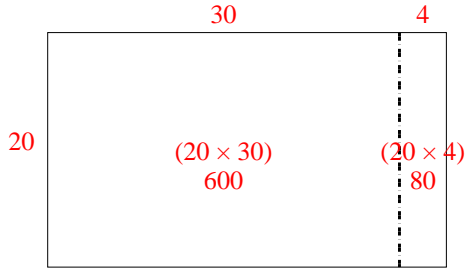
Answers

- 1. \_\_\_\_\_
- 2. \_\_\_\_\_
- 3. \_\_\_\_\_
- 4. \_\_\_\_\_
- 5. \_\_\_\_\_
- 6. \_\_\_\_\_

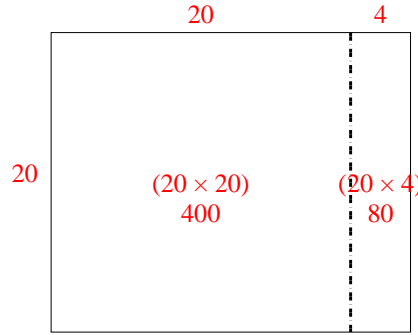


Use the array provided to solve each problem.

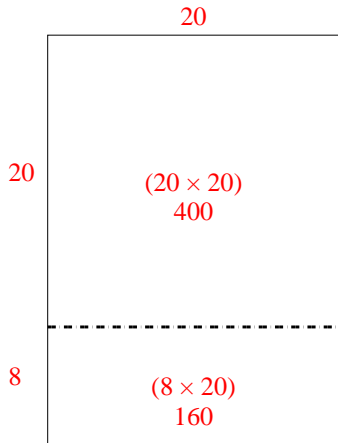
1)  $20 \times 34 =$



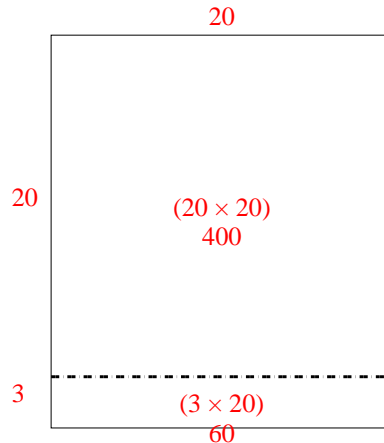
2)  $20 \times 24 =$



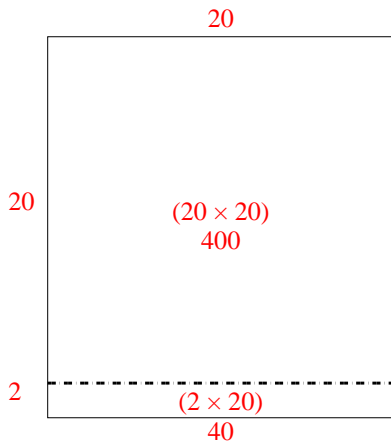
3)  $28 \times 20 =$



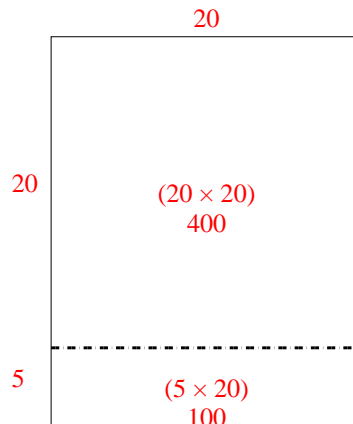
4)  $23 \times 20 =$



5)  $22 \times 20 =$



6)  $25 \times 20 =$




Answers

1. 680
2. 480
3. 560
4. 460
5. 440
6. 500




Use the array provided to solve each problem.


1)  $20 \times 32 =$




2)  $30 \times 36 =$




3)  $20 \times 23 =$




4)  $27 \times 20 =$



5)  $29 \times 20 =$



6)  $23 \times 20 =$



Answers

1. \_\_\_\_\_

2. \_\_\_\_\_

3. \_\_\_\_\_

4. \_\_\_\_\_

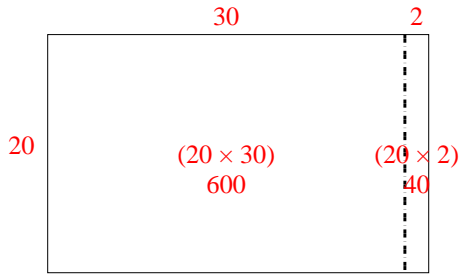
5. \_\_\_\_\_

6. \_\_\_\_\_

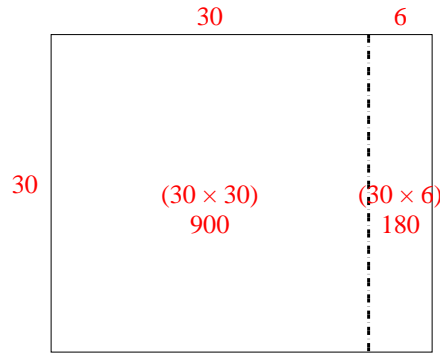


Use the array provided to solve each problem.

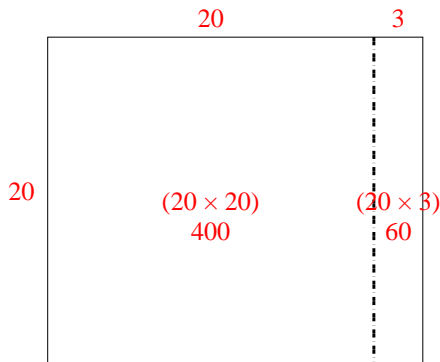
1)  $20 \times 32 =$



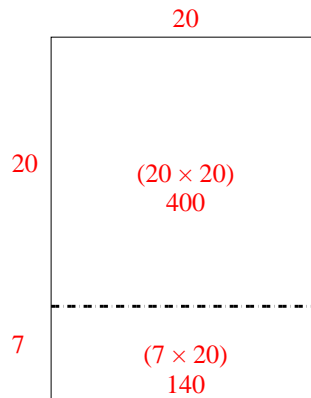
2)  $30 \times 36 =$



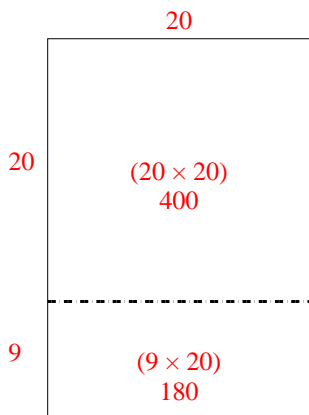
3)  $20 \times 23 =$



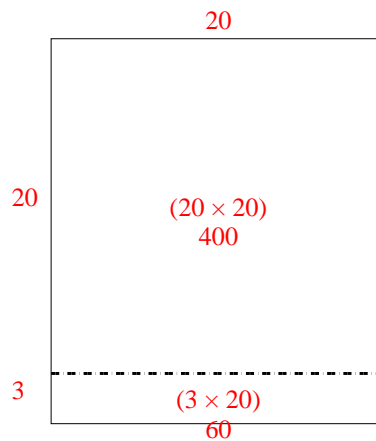
4)  $27 \times 20 =$



5)  $29 \times 20 =$



6)  $23 \times 20 =$



Answers

1. 640

2. 1,080

3. 460

4. 540


5. 580

6. 460




Use the array provided to solve each problem.


1)  $20 \times 22 =$




2)  $21 \times 20 =$




3)  $20 \times 25 =$



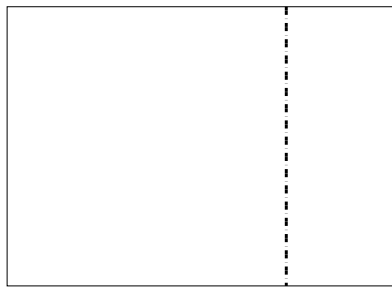
4)  $26 \times 20 =$



5)  $20 \times 27 =$



6)  $20 \times 28 =$



Answers

1. \_\_\_\_\_

2. \_\_\_\_\_

3. \_\_\_\_\_

4. \_\_\_\_\_

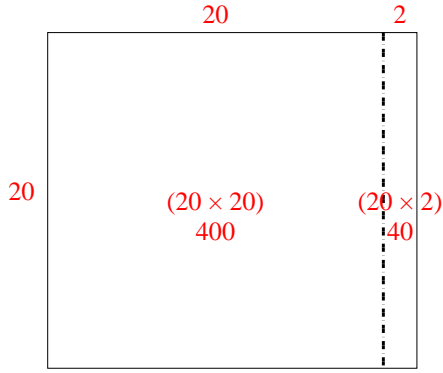
5. \_\_\_\_\_

6. \_\_\_\_\_

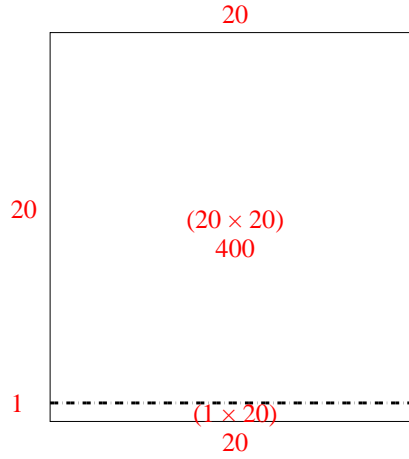


Use the array provided to solve each problem.

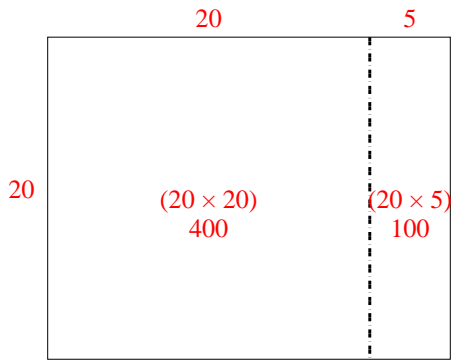
1)  $20 \times 22 =$



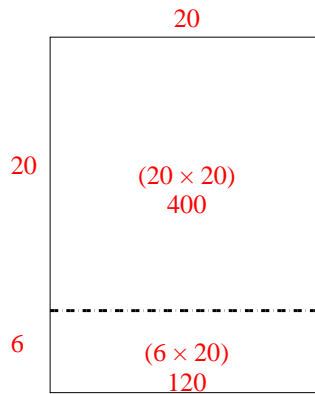
2)  $21 \times 20 =$



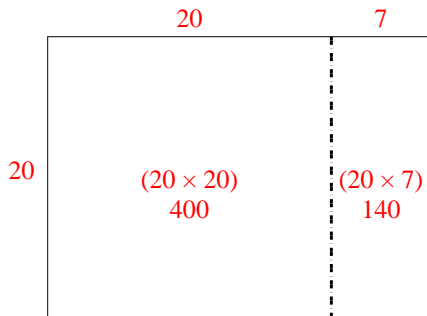
3)  $20 \times 25 =$



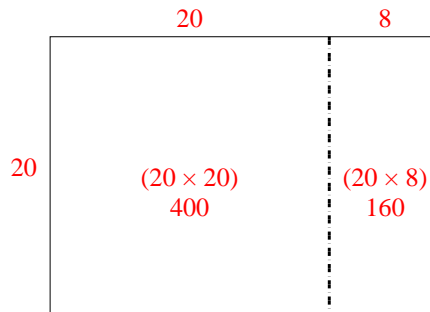
4)  $26 \times 20 =$



5)  $20 \times 27 =$



6)  $20 \times 28 =$



Answers

1. 440

2. 420

3. 500

4. 520

5. 540


6. 560





Use the array provided to solve each problem.


1)  $32 \times 30 =$




2)  $20 \times 38 =$




3)  $35 \times 20 =$




4)  $27 \times 30 =$



5)  $20 \times 26 =$



6)  $20 \times 28 =$



Answers

1. \_\_\_\_\_

2. \_\_\_\_\_

3. \_\_\_\_\_

4. \_\_\_\_\_

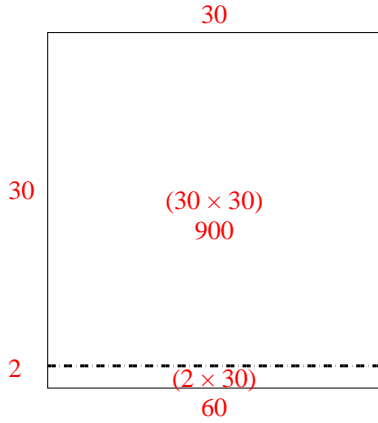
5. \_\_\_\_\_

6. \_\_\_\_\_

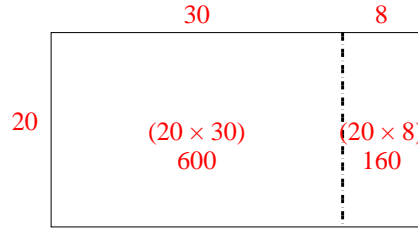


Use the array provided to solve each problem.

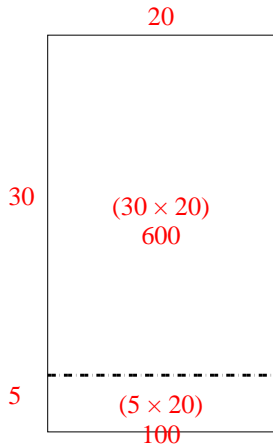
1)  $32 \times 30 =$



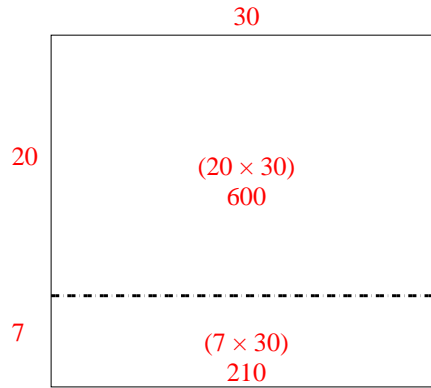
2)  $20 \times 38 =$



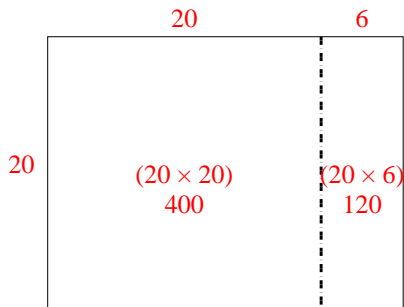
3)  $35 \times 20 =$



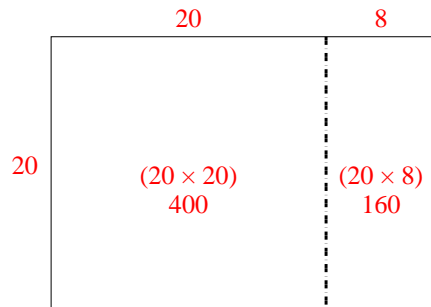
4)  $27 \times 30 =$



5)  $20 \times 26 =$



6)  $20 \times 28 =$




Answers

1. 960
2. 760
3. 700
4. 810
5. 520
6. 560




Use the array provided to solve each problem.


1)  $20 \times 36 =$




2)  $20 \times 25 =$




3)  $28 \times 20 =$




4)  $20 \times 28 =$



5)  $27 \times 20 =$



6)  $22 \times 20 =$



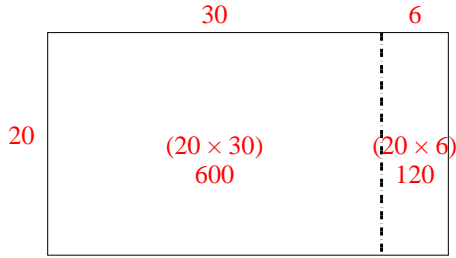
Answers

- 1. \_\_\_\_\_
- 2. \_\_\_\_\_
- 3. \_\_\_\_\_
- 4. \_\_\_\_\_
- 5. \_\_\_\_\_
- 6. \_\_\_\_\_

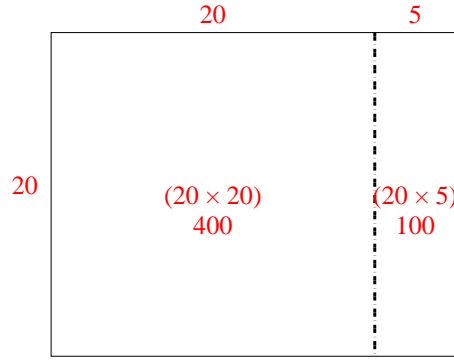


Use the array provided to solve each problem.

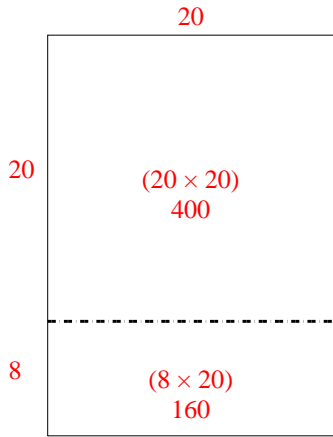
1)  $20 \times 36 =$



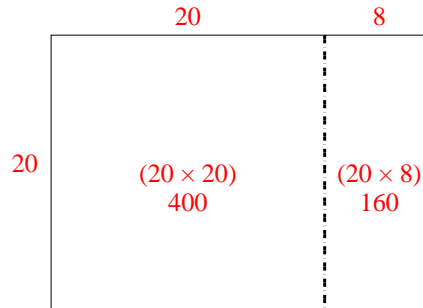
2)  $20 \times 25 =$



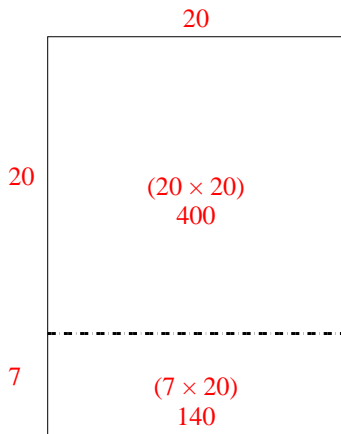
3)  $28 \times 20 =$



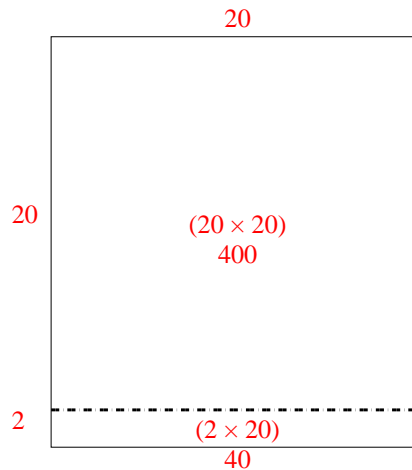
4)  $20 \times 28 =$



5)  $27 \times 20 =$



6)  $22 \times 20 =$



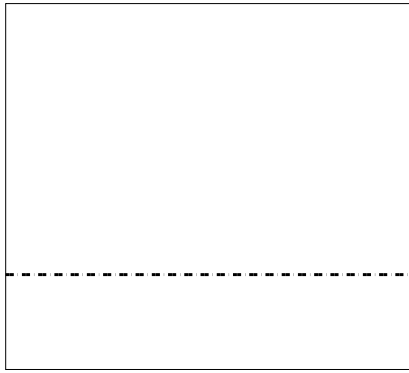
Answers

1. 720
2. 500
3. 560
4. 560
5. 540
6. 440




Use the array provided to solve each problem.


1)  $27 \times 30 =$




2)  $27 \times 20 =$




3)  $28 \times 20 =$




4)  $20 \times 28 =$



5)  $29 \times 20 =$



6)  $22 \times 20 =$



Answers

1. \_\_\_\_\_

2. \_\_\_\_\_

3. \_\_\_\_\_

4. \_\_\_\_\_

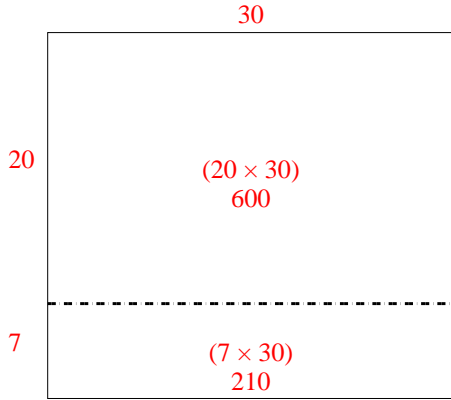
5. \_\_\_\_\_

6. \_\_\_\_\_

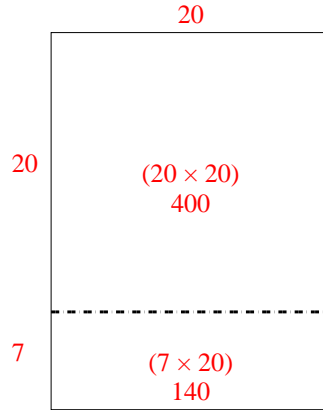


Use the array provided to solve each problem.

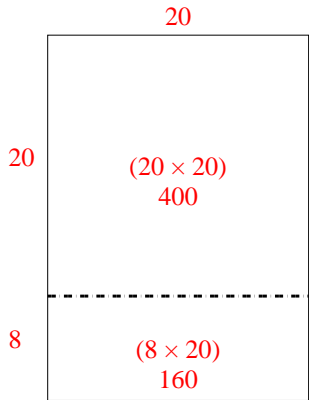
1)  $27 \times 30 =$



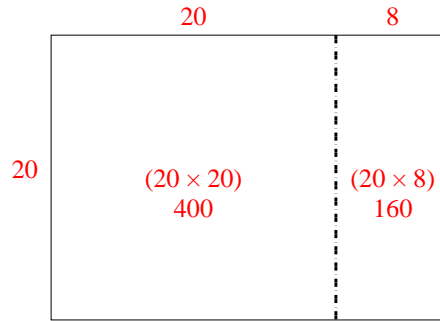
2)  $27 \times 20 =$



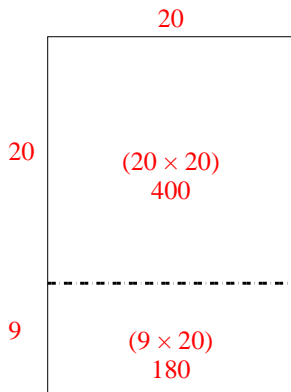
3)  $28 \times 20 =$



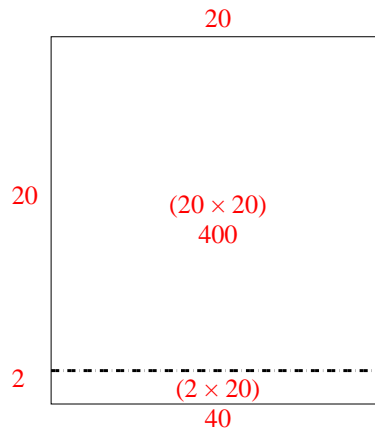
4)  $20 \times 28 =$



5)  $29 \times 20 =$



6)  $22 \times 20 =$



Answers

1. 810

2. 540

3. 560

4. 560


5. 580

6. 440




Use the array provided to solve each problem.

1)  $40 \times 21 =$




2)  $30 \times 24 =$




3)  $20 \times 21 =$




4)  $22 \times 20 =$



5)  $20 \times 28 =$



6)  $20 \times 22 =$



Answers

1. \_\_\_\_\_

2. \_\_\_\_\_

3. \_\_\_\_\_

4. \_\_\_\_\_

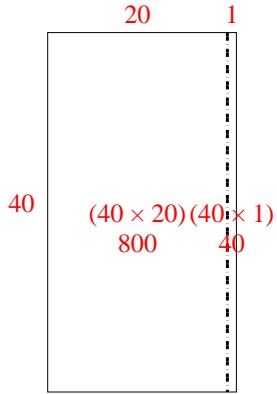
5. \_\_\_\_\_

6. \_\_\_\_\_

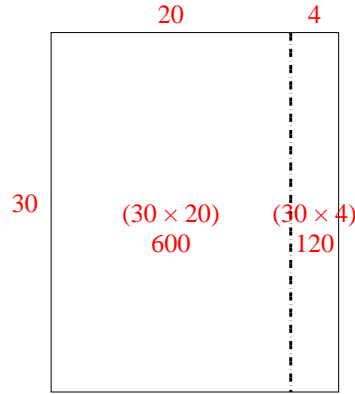


Use the array provided to solve each problem.

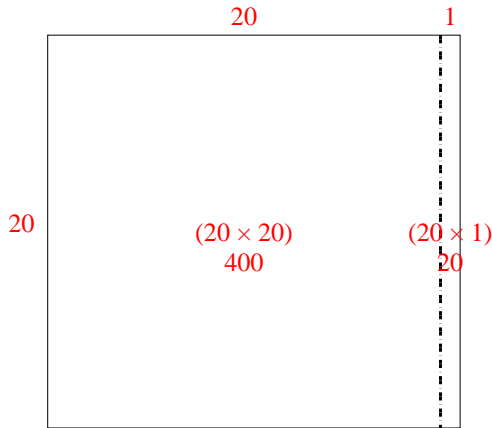
1)  $40 \times 21 =$



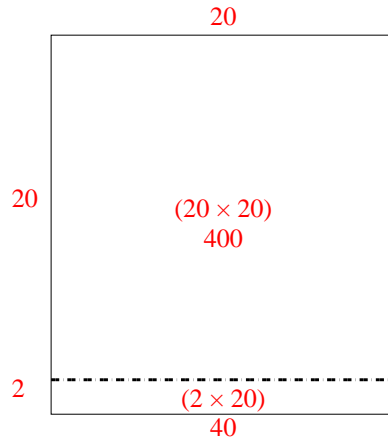
2)  $30 \times 24 =$



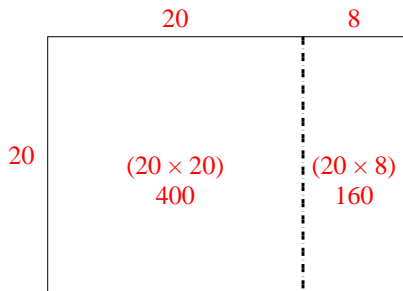
3)  $20 \times 21 =$



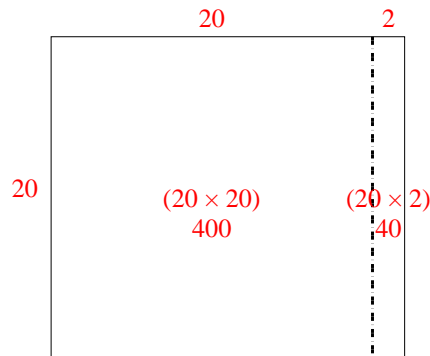
4)  $22 \times 20 =$



5)  $20 \times 28 =$



6)  $20 \times 22 =$



Answers

1. 840

2. 720

3. 420

4. 440

5. 560


6. 440






Use the array provided to solve each problem.


1)  $20 \times 33 =$



2)  $20 \times 24 =$




3)  $25 \times 20 =$




4)  $20 \times 22 =$



5)  $20 \times 27 =$



6)  $26 \times 20 =$



Answers

1. \_\_\_\_\_

2. \_\_\_\_\_

3. \_\_\_\_\_

4. \_\_\_\_\_

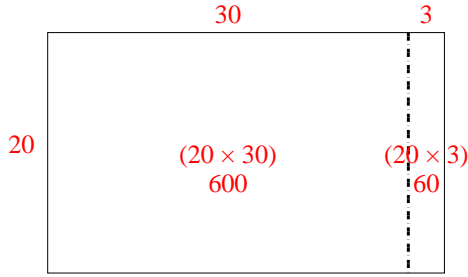
5. \_\_\_\_\_

6. \_\_\_\_\_

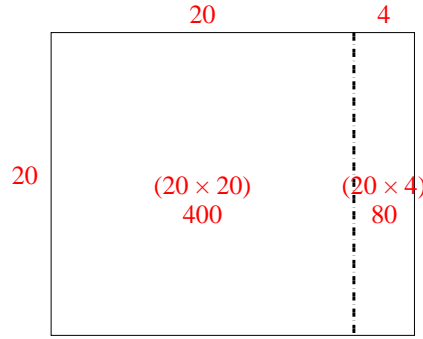


Use the array provided to solve each problem.

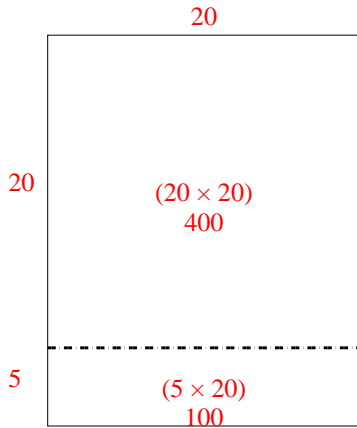
1)  $20 \times 33 =$



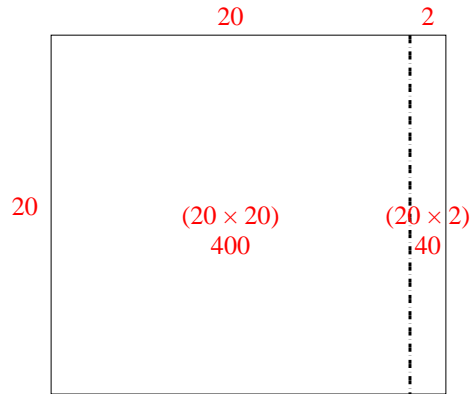
2)  $20 \times 24 =$



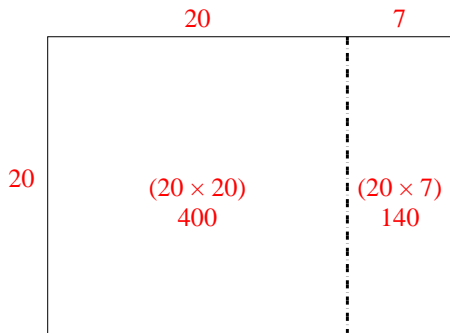
3)  $25 \times 20 =$



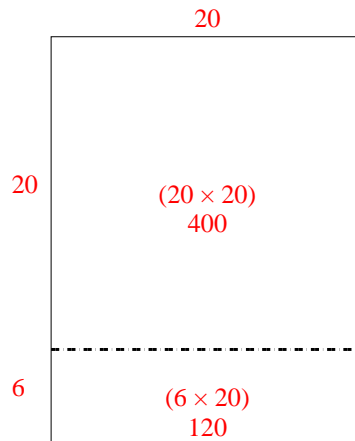
4)  $20 \times 22 =$



5)  $20 \times 27 =$



6)  $26 \times 20 =$




Answers

1. 660
2. 480
3. 500
4. 440
5. 540
6. 520




Use the array provided to solve each problem.


1)  $30 \times 29 =$




2)  $28 \times 20 =$




3)  $24 \times 20 =$




4)  $25 \times 20 =$



5)  $26 \times 20 =$



6)  $21 \times 20 =$



Answers

1. \_\_\_\_\_

2. \_\_\_\_\_

3. \_\_\_\_\_

4. \_\_\_\_\_

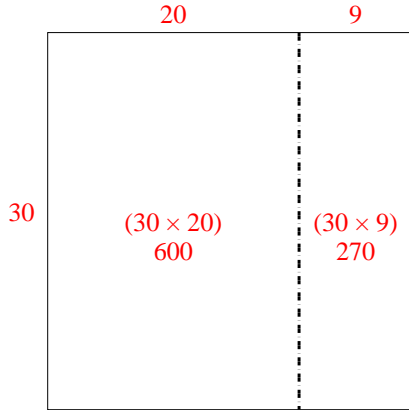
5. \_\_\_\_\_

6. \_\_\_\_\_

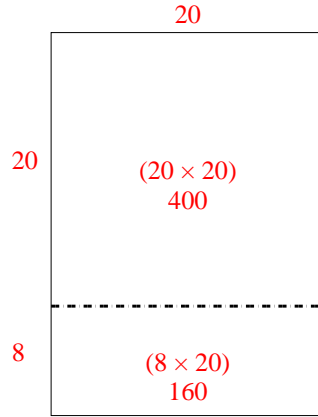


Use the array provided to solve each problem.

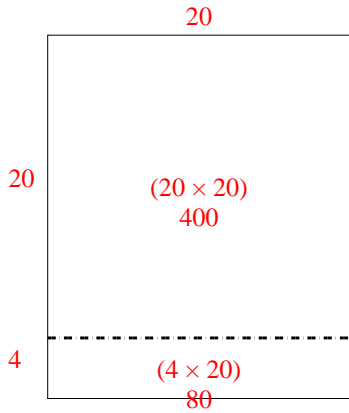
1)  $30 \times 29 =$



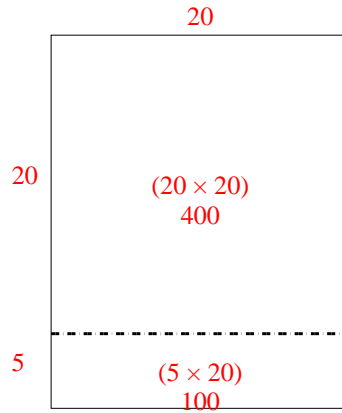
2)  $28 \times 20 =$



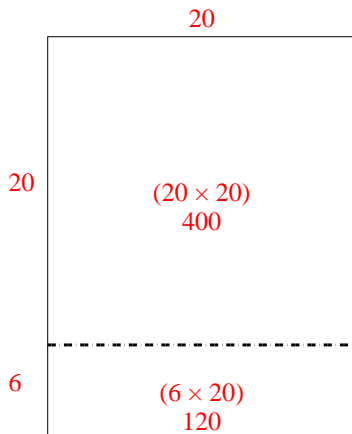
3)  $24 \times 20 =$



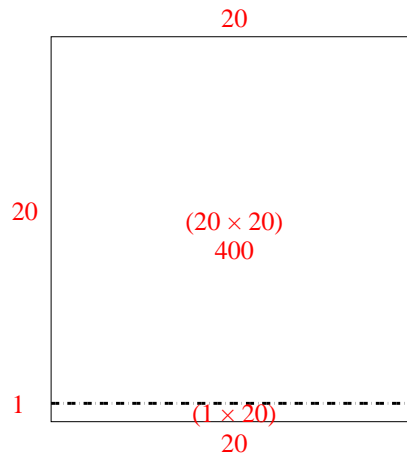
4)  $25 \times 20 =$



5)  $26 \times 20 =$



6)  $21 \times 20 =$



Answers

1. 870
2. 560
3. 480
4. 500
5. 520
6. 420